


Name: _____ Homework #28


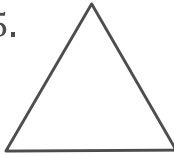
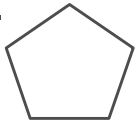
<p>Rounding <i>Round to the nearest hundred.</i></p> <ol style="list-style-type: none"> 1. 107 _____ 2. 853 _____ 3. 842 _____ 4. 465 _____ 5. 1,248 _____ 6. 7,958 _____ 7. 1,325 _____ 8. 78,179 _____ 	<p style="text-align: right;">Fractions</p> <ol style="list-style-type: none"> 9. Draw a model of $\frac{1}{9}$. 10. Draw a model of $\frac{2}{3}$. 11. Write the fraction represented by the star on the number line below. <div style="text-align: center;">  </div>
---	--

Fact Families
Use your knowledge of fact families to write three new facts using the same numbers.

12. $8 + 5 = 13$ ____ + ____ = ____ ____ - ____ = ____ ____ - ____ = ____	13. $10 - 3 = 7$ ____ - ____ = ____ ____ + ____ = ____ ____ + ____ = ____	14. $3 \times 5 = 15$ ____ x ____ = ____ ____ ÷ ____ = ____ ____ ÷ ____ = ____	15. $108 \div 9 = 12$ ____ ÷ ____ = ____ ____ x ____ = ____ ____ x ____ = ____
--	--	---	---

Multiplying by Multiples of 10

16. $40 \times 6 =$	17. $3 \times 40 =$	18. $40 \times 5 =$	19. $30 \times 8 =$
20. $60 \times 5 =$	21. $5 \times 50 =$	22. $80 \times 8 =$	23. $3 \times 70 =$

<p>Measurement</p> <p>24. Find the area and perimeter of the square below.</p> <div style="text-align: center; margin: 10px 0;">  </div> <p style="text-align: center;">A = P =</p>	<p style="text-align: right;">Geometry</p> <p>Name each shape.</p> <div style="display: flex; justify-content: space-around; align-items: flex-start; margin-top: 20px;"> <div style="text-align: center;"> <p>25.</p>  </div> <div style="text-align: center;"> <p>26.</p>  </div> </div>
--	--

Homework #28

<p>27. $748 - 679 =$</p>	<p>Whole Number Operations</p> <p>28. $511 + 93 + 87 =$</p>
<p>29. Rainer Park has an area of 843 square yards. Morris Park has an area of 912 square yards. Find the difference in the area of these two parks.</p>	<p>30. A summer camp hosts fourth, fifth, and sixth-graders. This summer there were 189 fourth-graders, 253 fifth-graders, and 109 sixth-graders. How many total students attended the camp?</p>
<p>31. Dennis bought 6 packs with 12 donuts per pack and 3 packs with 8 donuts per pack. How many donuts did Dennis buy in all?</p>	<p>32. Phillip spent \$32 on 4 books. Each book cost the same amount. How much did each book cost?</p>