


Name _____

**Chapter
11**


Test A

1. What time does the clock show?




Find the elapsed time.

2. Start: 2:20 P.M. End: 2:48 P.M.



_____ minutes

3. Start: 2:15 P.M. End: 3:05 P.M.



_____ minutes

4. Which units should you use to measure the liquid volume of a pool, *liters* or *milliliters*?

5. What is the total liquid volume shown?



6. Measure the length of the rectangle to the nearest centimeter.



_____ centimeters

7. Measure the length of the object to the nearest half inch.



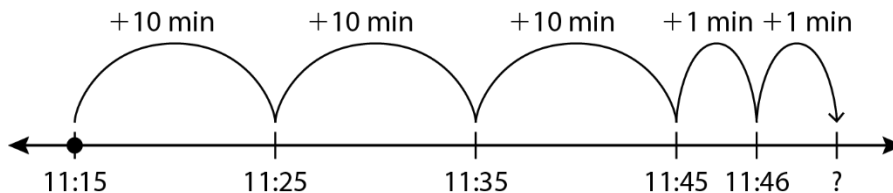
_____ inches

Name _____

**Chapter
11**

Test A (continued)

8. Find the elapsed time and the end time.



Elapsed time: _____ minutes

End time: _____ A.M.

9. You have 30 minutes to complete a test. You have been taking the test for 22 minutes. How much time do you have left to complete the test?

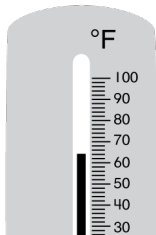
10. Find the end time.

Start: 6:37 P.M.

Elapsed time: 52 minutes

End time: _____ P.M.

11. Write the temperature shown by the thermometer.



_____ °F

12. You need 1,100 milliliters of water to fill the glasses on a table. You have the amount of water shown. How much more water do you need?




Name _____

**Chapter
11**


Test B

1. What time does the clock show?




Find the elapsed time.

2. Start: 12:08 P.M. End: 12:54 P.M.



_____ minutes

3. Start: 6:28 A.M. End: 7:12 A.M.



_____ minutes

4. Which units should you use to measure the liquid volume of an eye dropper, *liters* or *milliliters*?

5. What is the total liquid volume shown?



6. Measure the length of the rectangle to the nearest centimeter.



_____ centimeters

7. Measure the length of the object to the nearest half inch.



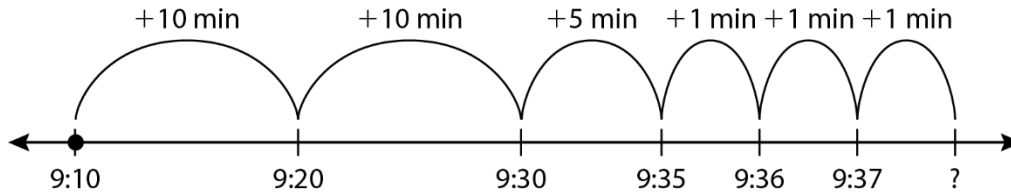
_____ inches

Name _____

**Chapter
11**

Test B (continued)

8. Find the elapsed time and the end time.



Elapsed time: _____ minutes

End time: _____ P.M.

9. You wait in line for 19 minutes to ride a roller coaster. Then you wait in line for 7 minutes to ride a Ferris wheel. How much time did you spend waiting in lines altogether?

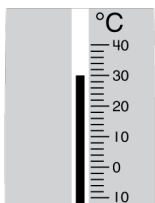
10. Find the end time.

Start: 2:18 A.M.

Elapsed time: 48 minutes

End: _____ A.M.

11. Write the temperature shown by the thermometer.



_____ °C

12. You need 1,300 milliliters of water to fill the glasses on a table. You have the amount of water shown. How much more water do you need?

